

# Spring Test 4

## Questions, Answers and Topic Information

Read the following instructions or press 'play' and listen to the instructions being read from the CD-ROM.

List carefully to the instructions I am going to give you. When I have finished reading them, I will answer any questions. You will not be able to ask any questions once the test has begun.

I am going to ask you 20 questions. On your sheet there is an answer box for each question, where you should write the answer to the question and nothing else. You should work out the answer to each question in your head, but you may jot things down outside the answer box if this helps you. Do not try to write down your working because this will waste time and you may miss the next question. For some of the questions, important information is already written down for you on the answer sheet.

I will read each question twice. Listen carefully both times. You will then have time to work out your answer. If you cannot work out an answer, put a cross in the answer box. If you make a mistake, cross out the wrong answer and write the correct one next to it. There are some easy and some harder questions, so do not be put off if you cannot answer a question.

Now pause, or press 'pause' on your CD player or computer. Ask the children if they have any questions. Once you have answered all the questions, read out the following instructions. Alternatively, play the audio recording from the CD-ROM.

► Now we are ready to start the test.

**For this group of questions you will have 5 seconds to work out each answer and write it down.**

- 1 What is one hundred more than three hundred and twelve?
- 2 What is eight times ten?
- 3 Write the number that is ten less than six hundred and eighty-four.
- 4 What is the total of forty-three and forty-eight?
- 5 Look at your answer sheet. Write the time shown on the clock.
- 6 What must be added to twenty-two to make one hundred?
- 7 How many sides has a quadrilateral?
- 8 Round six hundred and seventy-eight to the nearest ten.
- 9 Write one-hundredth as a decimal number.
- 10 Look at your answer sheet. What is the total of the coins?

**For this group of questions you will have 10 seconds to work out each answer and write it down.**

- 11 Look at your answer sheet. Tick the shape with only two straight sides.
- 12 A DVD costs sixteen pounds fifty. How much change should Kai get from twenty pounds?
- 13 Look at your answer sheet. Circle the time people are most likely to be asleep.
- 14 Add six and five and multiply the result by seven.
- 15 On a camping trip, each tent holds four people. If twenty-four people go on the trip, how many tents will be needed?
- 16 Look at your answer sheet. Circle the smallest number.
- 17 How many centimetres in one and a half metres?
- 18 Multiply twenty-five by six.
- 19 Look at your answer sheet. Circle the expression that will reverse 'halve 30'.
- 20 Write a number less than forty that is a multiple of three and also a multiple of five.



Now put down your pen or pencil. The test is finished.

NPV = Number, place value  
Dc = Decimals  
AS = Addition and subtraction  
M = Measurement  
MD = Multiplication and division  
PS = Properties of shapes  
PD = Position, direction  
F = Fractions





# Spring Test 4

Name: ..... Class: ..... Date: .....

## 5-second questions

1	312
2	
3	684
4	43 48
5	
6	22
7	
8	678
9	$\frac{1}{100}$
10	£ 

## 10-second questions

11	   
12	£16.50 £20
13	10 a.m. 3 p.m. 3 a.m. 6 p.m.
14	6 5 7
15	24
16	3512 5321 3215 3251
17	cm $1\frac{1}{2}$ m
18	25
19	$30 \div 2$ 30 - 15 30 + 30 double 15
20	40 3 5

Total marks /20

How well did you do?

Colour the numbers of the questions you got right.

Number, place value	1	3	8	16	20
Addition and subtraction	4	6	10	12	14
Multiplication and division	2	14	15	18	19
Fractions					
Decimals	9				
Measurement	5	10	12	13	17