

# Ordering Fractions

Order these fractions from the smallest to largest.

$$\frac{3}{4} \quad \frac{1}{4} \quad \frac{2}{4}$$

Order these fractions from the largest to the smallest.

$$\frac{4}{6} \quad \frac{6}{6} \quad \frac{3}{6} \quad \frac{1}{6} \quad \frac{5}{6}$$

Color in these 2 fractions below.

$$\frac{2}{5}$$



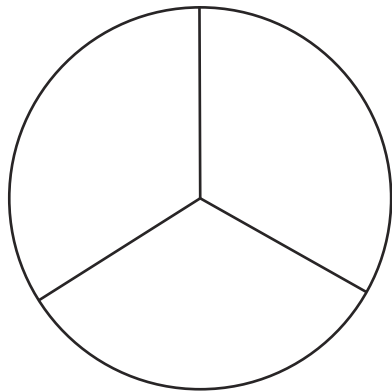
\_\_\_\_\_ is the greater fraction.

$$\frac{4}{5}$$

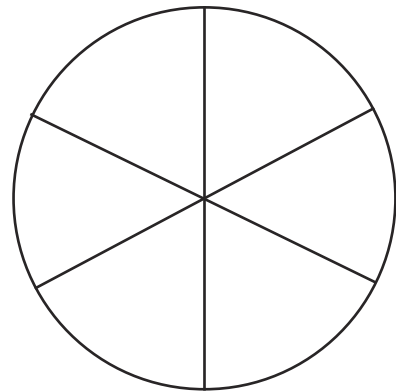


Color in these 2 fractions below.

$$\frac{2}{3}$$



$$\frac{5}{6}$$

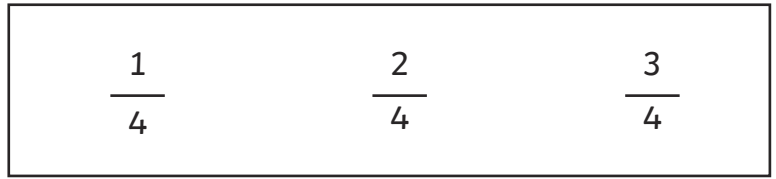


\_\_\_\_\_ is the greater fraction.

# Ordering Fractions Answers

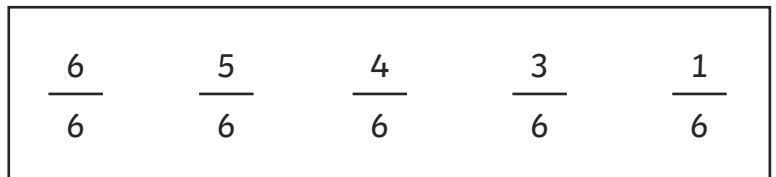
Order these fractions from the smallest to largest.

$$\frac{3}{4} \quad \frac{1}{4} \quad \frac{2}{4}$$



Order these fractions from the largest to the smallest.

$$\frac{4}{6} \quad \frac{6}{6} \quad \frac{3}{6} \quad \frac{1}{6} \quad \frac{5}{6}$$



Color the boxes according to its fraction.

$$\frac{2}{5}$$



$$\frac{4}{5}$$

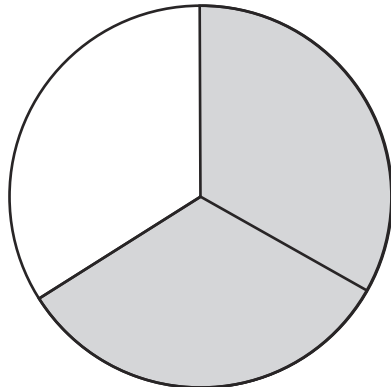
\_\_\_\_\_ is the greater fraction.

$$\frac{4}{5}$$

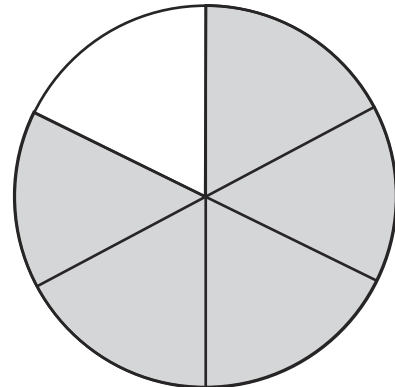


Color in these 2 fractions below.

$$\frac{2}{3}$$



$$\frac{5}{6}$$



$$\frac{5}{6}$$

\_\_\_\_\_ is the greater fraction.

# Ordering Fractions

Order these fractions from the smallest to largest.

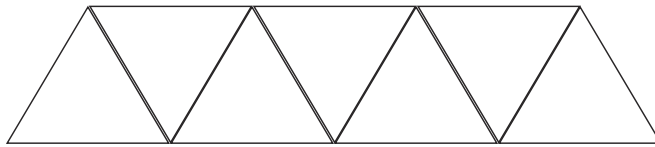
$$\frac{3}{6} \quad \frac{1}{6} \quad \frac{5}{6} \quad \frac{2}{6} \quad \frac{4}{6}$$

Order these fractions from the largest to the smallest.

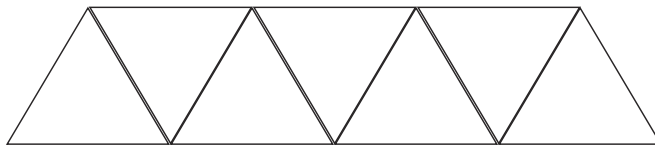
$$\frac{4}{12} \quad \frac{6}{12} \quad \frac{8}{12} \quad \frac{10}{12} \quad \frac{11}{12}$$

Color in these 2 fractions below.

$$\frac{3}{7}$$

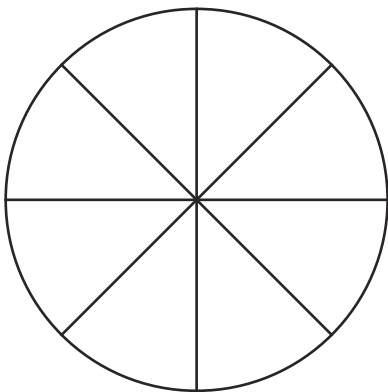


$$\frac{6}{7}$$

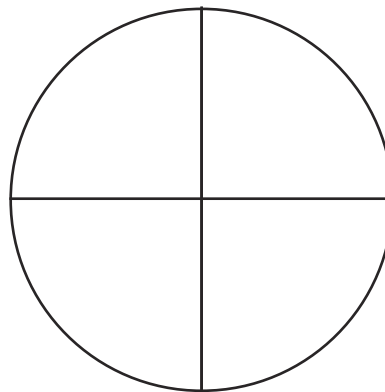


\_\_\_\_\_ is the greater fraction.

$$\frac{5}{8}$$



$$\frac{3}{4}$$



\_\_\_\_\_ is the greater fraction.

# Ordering Fractions Answers

Order these fractions from the smallest to largest.

$$\frac{3}{6} \quad \frac{1}{6} \quad \frac{5}{6} \quad \frac{2}{6} \quad \frac{4}{6}$$

$\frac{1}{6}$	$\frac{2}{6}$	$\frac{3}{6}$	$\frac{4}{6}$	$\frac{5}{6}$
---------------	---------------	---------------	---------------	---------------

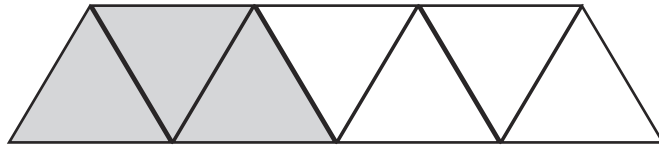
Order these fractions from the largest to the smallest.

$$\frac{4}{12} \quad \frac{6}{12} \quad \frac{8}{12} \quad \frac{10}{12} \quad \frac{11}{12}$$

$\frac{11}{12}$	$\frac{10}{12}$	$\frac{8}{12}$	$\frac{6}{12}$	$\frac{4}{12}$
-----------------	-----------------	----------------	----------------	----------------

Color in these 2 fractions below.

$$\frac{3}{7}$$

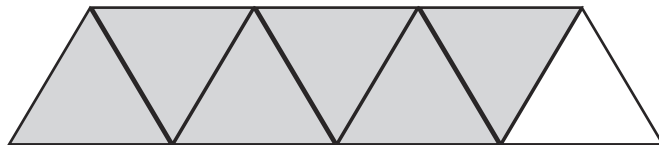


$$\frac{6}{7}$$

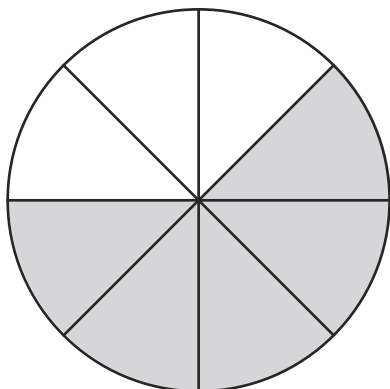
\_\_\_\_\_

is the greater fraction.

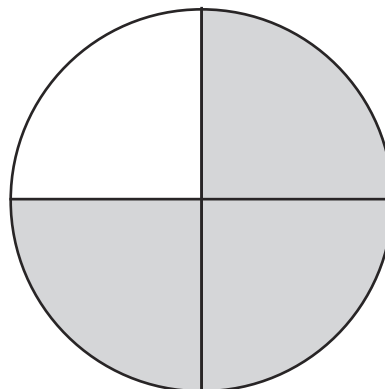
$$\frac{6}{7}$$



$$\frac{5}{8}$$



$$\frac{3}{4}$$



$$\frac{3}{4}$$

\_\_\_\_\_ is the greater fraction.

# Ordering Fractions

Order these fractions from the smallest to largest.

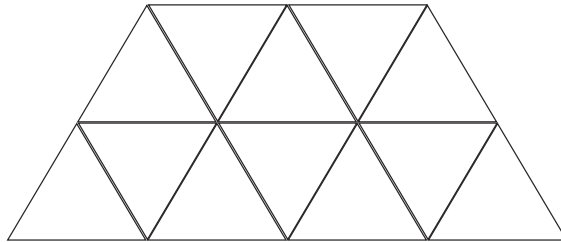
$$\frac{9}{18} \quad \frac{1}{9} \quad \frac{5}{9} \quad \frac{1}{3} \quad \frac{8}{9}$$

Order these fractions from the largest to the smallest.

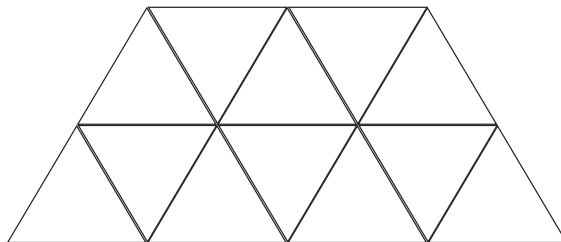
$$\frac{4}{15} \quad \frac{9}{15} \quad \frac{1}{5} \quad \frac{4}{5} \quad \frac{11}{15}$$

Color in these 2 fractions below.

$$\frac{7}{12}$$

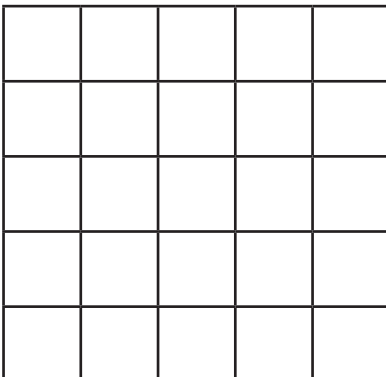


$$\frac{9}{12}$$

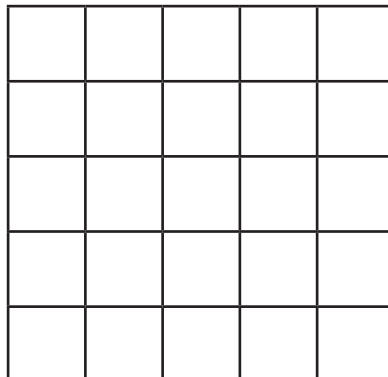


\_\_\_\_\_ is the greater fraction.

$$\frac{17}{25}$$



$$\frac{4}{5}$$



\_\_\_\_\_ is the greater fraction.

# Ordering Fractions Answer

Order these fractions from the smallest to largest.

$$\frac{9}{18} \quad \frac{1}{9} \quad \frac{5}{9} \quad \frac{1}{3} \quad \frac{8}{9}$$

$\frac{1}{9}$	$\frac{1}{3}$	$\frac{9}{18}$	$\frac{5}{9}$	$\frac{8}{9}$
---------------	---------------	----------------	---------------	---------------

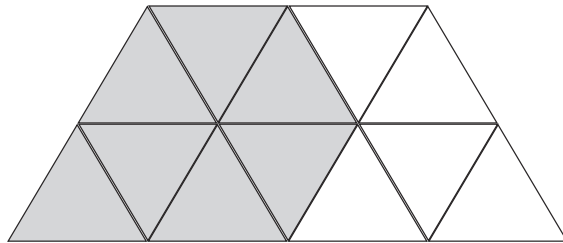
Order these fractions from the largest to the smallest.

$$\frac{4}{15} \quad \frac{9}{15} \quad \frac{1}{5} \quad \frac{4}{5} \quad \frac{11}{15}$$

$\frac{4}{5}$	$\frac{11}{15}$	$\frac{9}{15}$	$\frac{4}{15}$	$\frac{1}{5}$
---------------	-----------------	----------------	----------------	---------------

Color in these 2 fractions below.

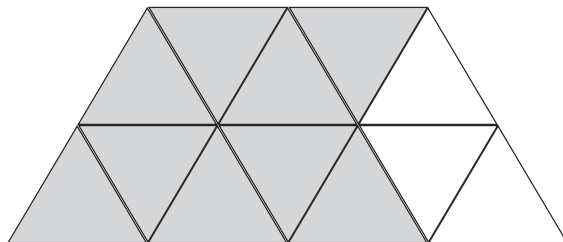
$$\frac{7}{12}$$



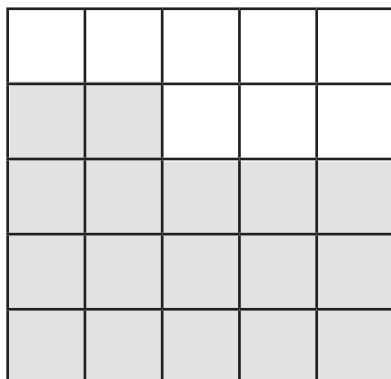
$$\frac{9}{12}$$

is the greater fraction.

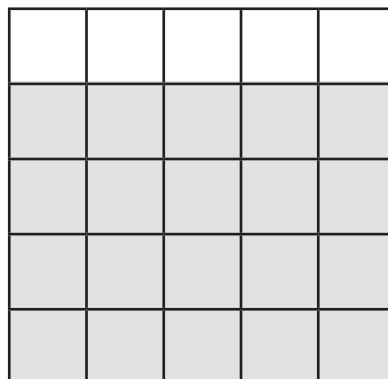
$$\frac{9}{12}$$



$$\frac{17}{25}$$



$$\frac{4}{5}$$



$$\frac{4}{5}$$

is the greater fraction.